

Ch 27. 전류와 저항

1. An electric current is given by the expression $I(t) = 100 \sin(120\pi t)$, where I is in amperes and t is in seconds. What is the total charge carried by the current from $t = 0$ to $t = (1/240)$ s?
2. The electron beam emerging from a certain high-energy electron accelerator has a circular cross section of radius 1.00 mm. (a) The beam current is $8.00 \mu\text{A}$. Find the current density in the beam, assuming that it is uniform throughout. (b) The speed of the electrons is so close to the speed of light that their speed can be taken as $c = 3.00 \times 10^8$ m/s with negligible error. Find the electron density in the beam. (c) How long does it take for Avogadro's number of electrons to emerge from the accelerator?
3. Suppose that you wish to fabricate a uniform wire out of 1.00 g of copper. If the wire is to have a resistance of $R = 0.500 \Omega$, and if all of the copper is to be used, what will be (a) the length and (b) the diameter of this wire?
4. A certain toaster has a heating element made of Nichrome wire. When the toaster is first connected to a 120-V source (and the wire is at a temperature of 20.0°C), the initial current is 1.80 A. However, the current begins

to decrease as the heating element warms up. When the toaster reaches its final operating temperature, the current drops to 1.53 A. (a) Find the power delivered to the toaster when it is at its operating temperature. (b) What is the final temperature of the heating element?

5. A charge Q is placed on a capacitor of capacitance C . The capacitor is connected into the circuit shown in Figure P27.55, with an open switch, a resistor, and an initially uncharged capacitor of capacitance $3C$. The switch is then closed and the circuit comes to equilibrium. In terms of Q and C , find (a) the final potential difference between the plates of each capacitor, (b) the charge on each capacitor, and (c) the final energy stored in each capacitor. (d) Find the internal energy appearing in the resistor.

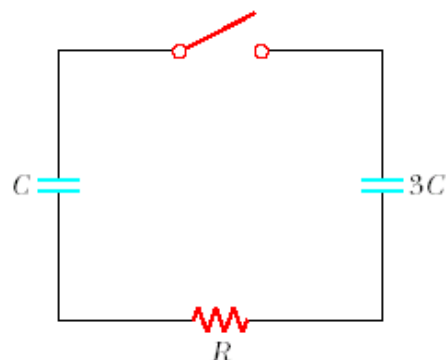


Figure P27.55

Ch. 28. 직류회로

1. (a) Find the equivalent resistance between points a and b in Figure P28.6. (b) A potential difference of 34.0 V is applied between points a and b . Calculate the current in each resistor.

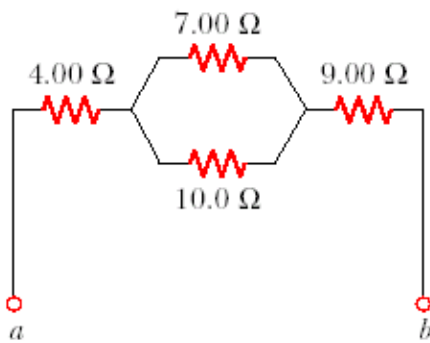


Figure P28.6

2. Determine the current in each branch of the circuit shown in Figure P28.21.

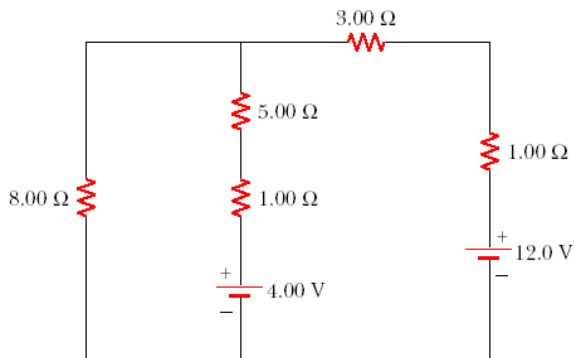


Figure P28.21

3. Using Kirchhoff's rules, (a) find the current in each resistor in Figure P28.24. (b) Find the potential difference between points c and f . Which point is at the higher potential?

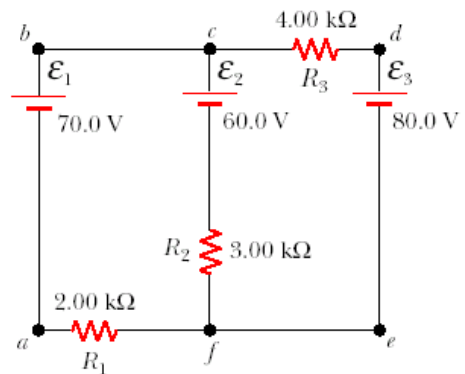


Figure P28.24

4. Calculate the power delivered to each resistor shown in Figure P28.30.

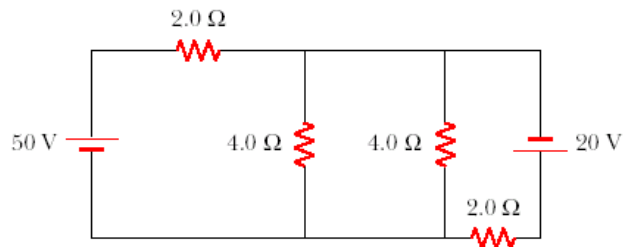


Figure P28.30

5. In the circuit of Figure P28.36, the switch S has been open for a long time. It is then suddenly closed. Determine the time constant (a) before the switch is closed and (b) after the switch is closed. (c) Let the switch be closed at $t = 0$. Determine the current in the switch as a function of time.

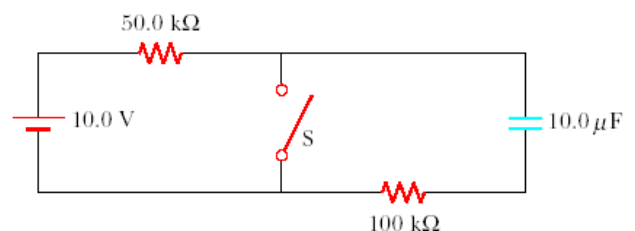


Figure P28.36